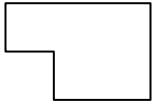




Determine which letter BEST represents the shapes that were used to create the figure shown.

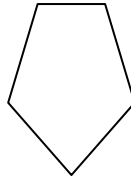
**Answers**

1)



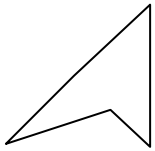
- A. pentagon & square
- B. rectangle & square
- C. heptagon & octagon
- D. triangle & rectangle

2)



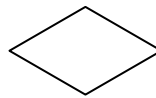
- A. triangle & octagon
- B. pentagon & hexagon
- C. quadrilateral & triangle
- D. octagon & pentagon

3)



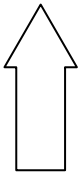
- A. rectangle & heptagon
- B. quadrilateral & rectangle
- C. triangle & triangle
- D. heptagon & octagon

4)



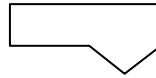
- A. octagon & heptagon
- B. triangle & triangle
- C. quadrilateral & square
- D. triangle & square

5)



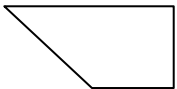
- A. square & rectangle
- B. heptagon & square
- C. pentagon & heptagon
- D. triangle & quadrilateral

6)



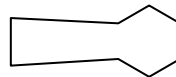
- A. octagon & quadrilateral
- B. square & triangle
- C. rectangle & triangle
- D. octagon & triangle

7)



- A. rectangle & square
- B. triangle & quadrilateral
- C. heptagon & octagon
- D. octagon & pentagon

8)



- A. octagon & quadrilateral
- B. octagon & heptagon
- C. quadrilateral & hexagon
- D. pentagon & hexagon

- 1. \_\_\_\_\_
- 2. \_\_\_\_\_
- 3. \_\_\_\_\_
- 4. \_\_\_\_\_
- 5. \_\_\_\_\_
- 6. \_\_\_\_\_
- 7. \_\_\_\_\_
- 8. \_\_\_\_\_



Determine which letter BEST represents the shapes that were used to create the figure shown.

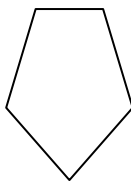
**Answers**

1)



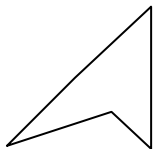
- A. pentagon & square
- B. rectangle & square
- C. heptagon & octagon
- D. triangle & rectangle

2)



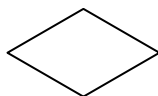
- A. triangle & octagon
- B. pentagon & hexagon
- C. quadrilateral & triangle
- D. octagon & pentagon

3)



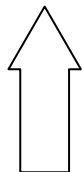
- A. rectangle & heptagon
- B. quadrilateral & rectangle
- C. triangle & triangle
- D. heptagon & octagon

4)



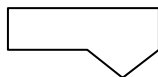
- A. octagon & heptagon
- B. triangle & triangle
- C. quadrilateral & square
- D. triangle & square

5)



- A. square & rectangle
- B. heptagon & square
- C. pentagon & heptagon
- D. triangle & quadrilateral

6)



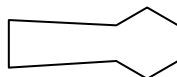
- A. octagon & quadrilateral
- B. square & triangle
- C. rectangle & triangle
- D. octagon & triangle

7)



- A. rectangle & square
- B. triangle & quadrilateral
- C. heptagon & octagon
- D. octagon & pentagon

8)



- A. octagon & quadrilateral
- B. octagon & heptagon
- C. quadrilateral & hexagon
- D. pentagon & hexagon

- 1.   **B**
- 2.   **C**
- 3.   **C**
- 4.   **B**
- 5.   **D**
- 6.   **C**
- 7.   **B**
- 8.   **C**